



Rewarding Learning

ADVANCED
General Certificate of Education
2022

Centre Number

--	--	--	--	--

Candidate Number

--	--	--	--

Biology

Assessment Unit A2 1

assessing

Physiology, Coordination and
Control, and Ecosystems

MV24

[ABY11]

WEDNESDAY 1 JUNE, MORNING

Time

2 hours 15 minutes, plus your additional time allowance.

Instructions to Candidates

Write your Centre Number and Candidate Number in the spaces provided at the top of this page.

You must answer the questions in the spaces provided.

Do not write on blank pages.

Complete in black ink only.

Answer **all nine** questions.

Information for Candidates

The total mark for this paper is 100.

Section A carries 82 marks. Section B carries 18 marks.

Figures in brackets printed at the end of each question indicate the marks awarded to each question or part question.

You are reminded of the need for good English and clear presentation in your answers.

Use accurate scientific terminology in all answers.

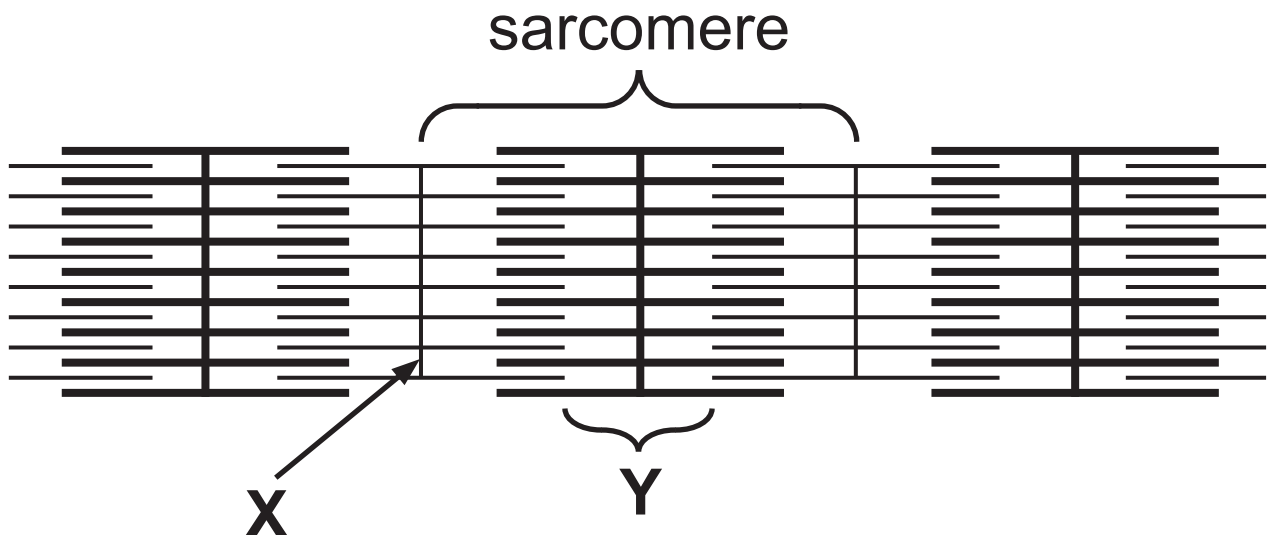
You should spend approximately **25 minutes** on Section B.

You are expected to answer Section B in continuous prose.

Quality of written communication will be assessed in Section B.

Section A

- 1 (a) The diagram below represents a section through a myofibril in skeletal muscle.



- (i) Identify the sarcomere components labelled **X** and **Y**. [2 marks]

X _____

Y _____

- (ii) The diagram represents the myofibril in a relaxed state. When contracted, the sarcomere will decrease in length. State **two** other changes that would be observed in the myofibril.

[2 marks]

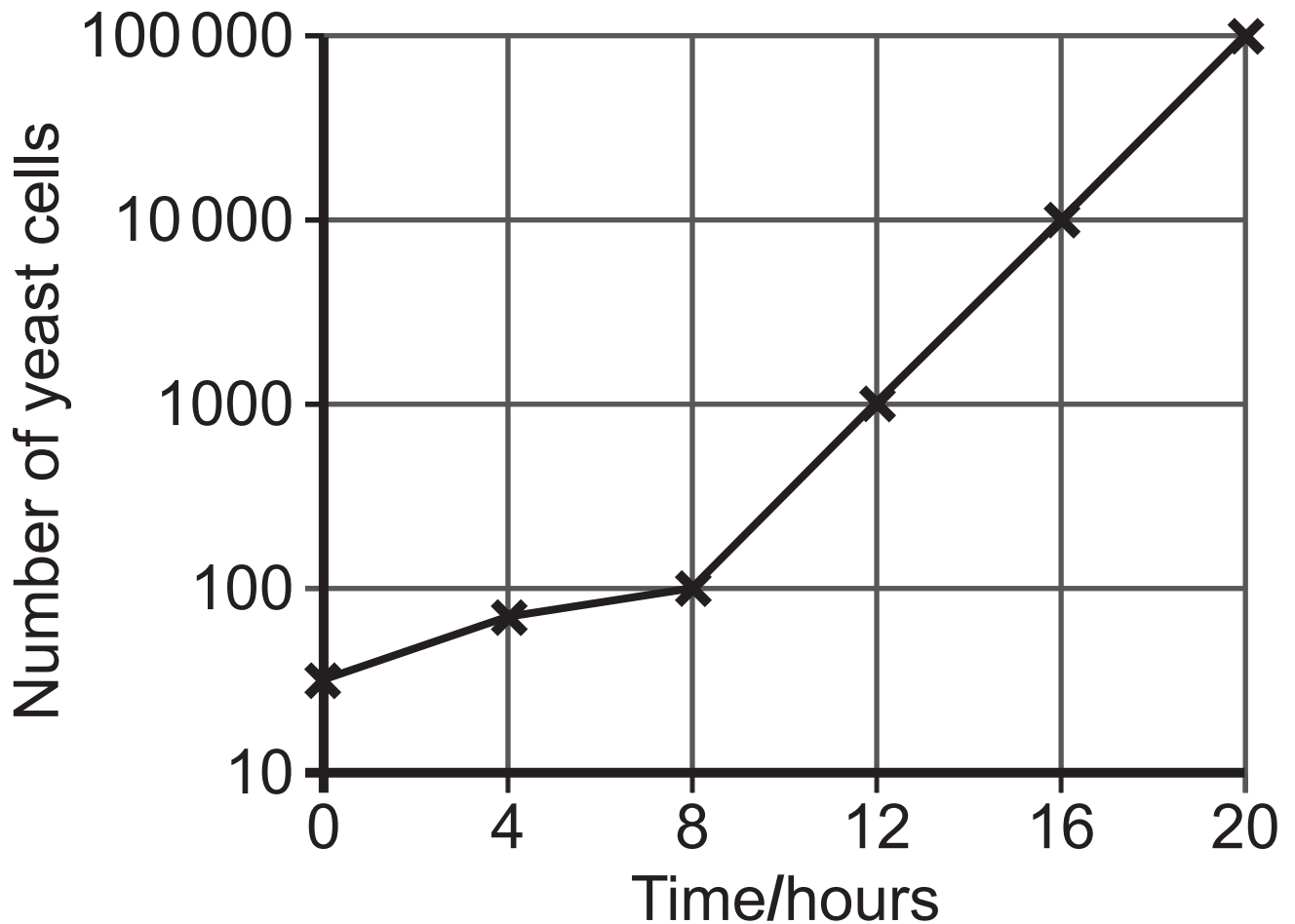
1. _____

2. _____

(b) Describe the role of calcium ions in muscle contraction. [1 mark]

Blank Page
(Questions continue overleaf)

- 2 The graph below shows how yeast cell numbers changed after being added to a beaker containing a nutrient-rich solution.



- (a) Name the population growth phase which occurred between 0 and 8 hours.
[1 mark]

(b) State the evidence which suggests that the carrying capacity of this culture had **not** been reached after 20 hours.

[1 mark]

(c) Calculate the average rate of increase of yeast cells between 8 and 20 hours.

[2 marks]

(Show your working.)

_____ cells hour⁻¹

(d) Using your understanding of population growth, describe and explain the pattern shown in the graph. [4 marks]

3 Homeostasis is the maintenance of constant (steady state) conditions within the body. The kidneys control the body's water balance and are therefore important homeostatic organs.

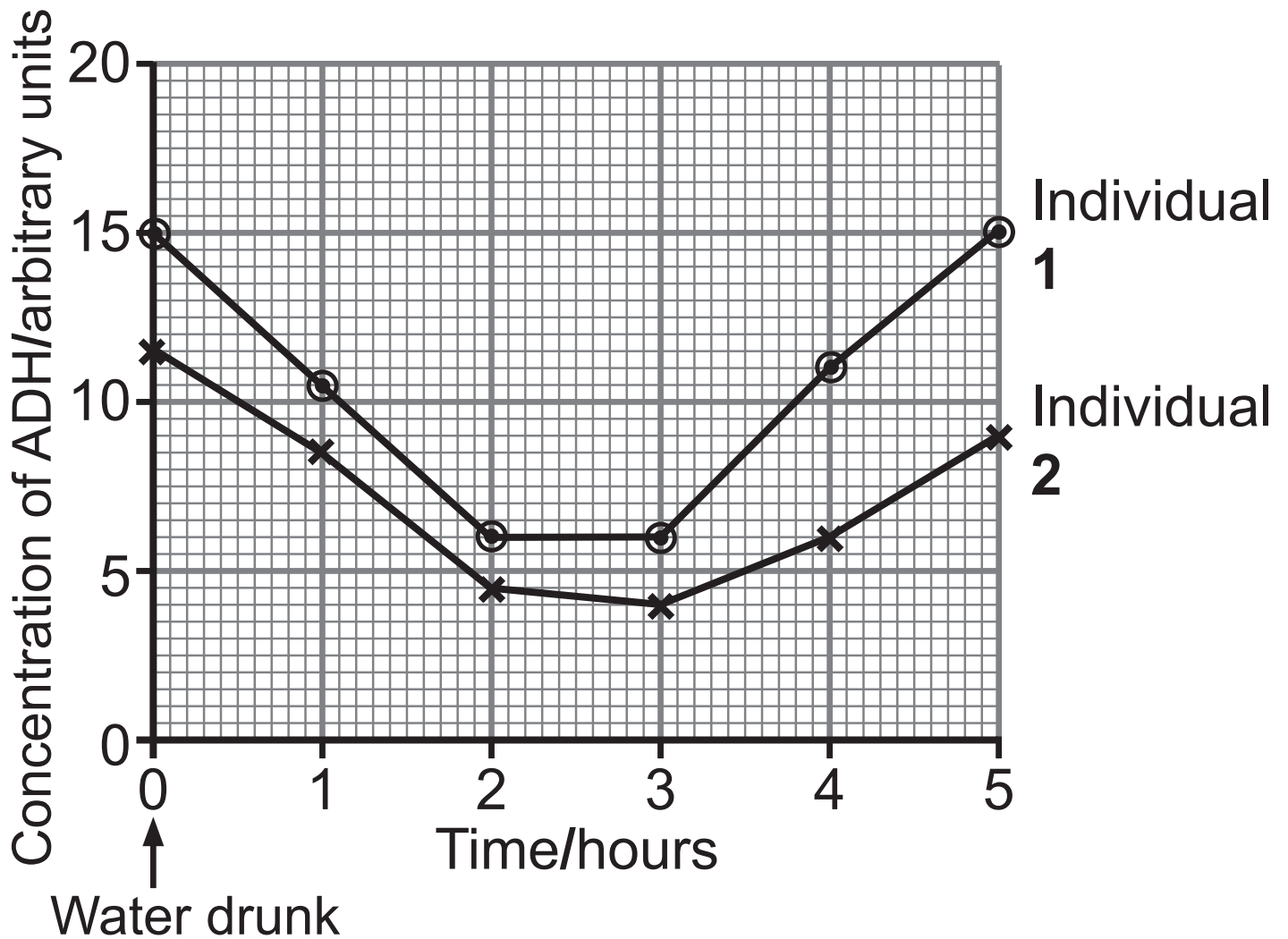
Homeostatic systems have sensors which monitor the factor to be controlled.

(a) State the precise location of the sensors which monitor the solute potential of the blood. [1 mark]

(b) Antidiuretic hormone (ADH) is important in osmoregulation. It acts by controlling the amount of reabsorption of water from the collecting ducts of nephrons into surrounding blood vessels.

ADH binds to receptors on the plasma membrane of cells lining the collecting ducts. This binding causes the movement of aquaporins (water channel proteins) towards the plasma membrane. Aquaporins then become incorporated into the membrane.

The graph opposite shows the concentration of ADH in the blood of two individuals (**1** and **2**) over a five-hour period, after drinking 600 cm^3 of water.



(i) Describe and explain the results shown for individual 1. [5 marks]

Continue answer overleaf

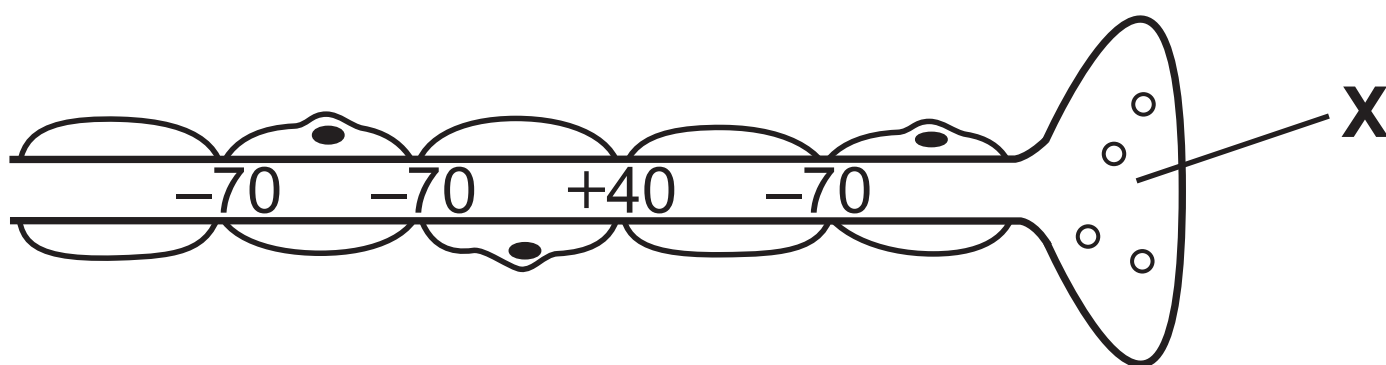
(ii) The ADH concentration of individual **1** was higher at the start of the investigation. Suggest what might have caused this. [1 mark]

(c) Explain the term ‘negative feedback’ in the context of osmoregulation.
[1 mark]

The ADH receptors on the plasma membrane are proteins. Their shape may be distorted, for example as a result of mutation.

(d) Using the information provided, suggest and explain how the presence of distorted ADH receptors could affect the kidneys’ role in osmoregulation.
[3 marks]

- 4 (a) The diagram below represents part of a myelinated neurone. The membrane potential (in mV) inside the axon membrane relative to the outside is shown at several positions along the axon.



- (i) How many Schwann cells are shown in the diagram? [1 mark]

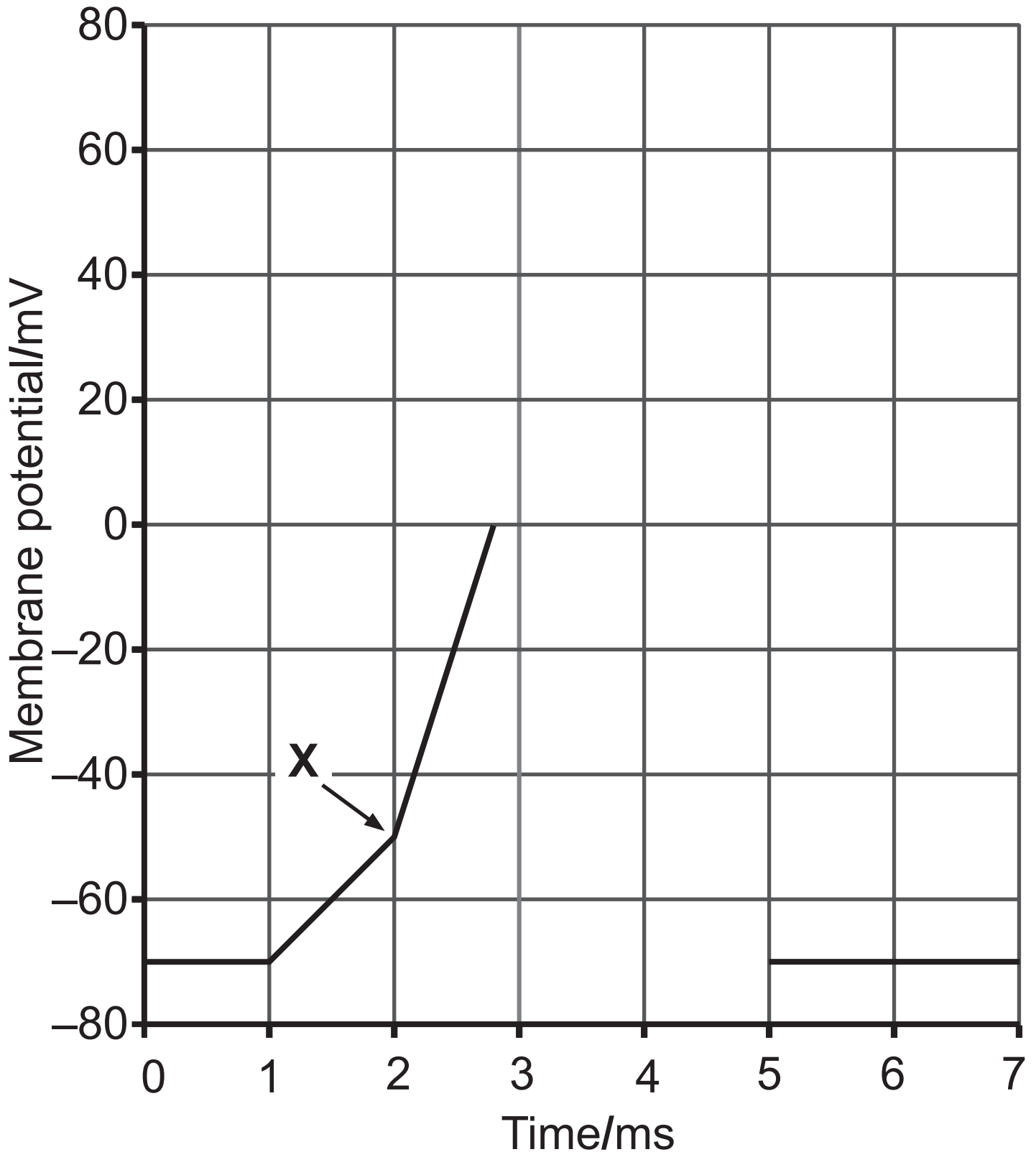
- (ii) Identify structure X. [1 mark]

- (iii) On the diagram, add an arrow to show the next part of the neurone which will become depolarised. [1 mark]

(iv) Explain how the myelin sheath increases the speed of a nerve impulse. [2 marks]

(v) Apart from the presence of a myelin sheath, state **one** other factor that increases the speed of a nerve impulse. [1 mark]

(b) The partially completed graph below shows changes in membrane potential as an action potential occurs.



(i) Complete the graph to show the changes in membrane potential until the resting potential is restored.
[2 marks]

(ii) Suggest what causes the change in rate of depolarisation at position **X**.
[1 mark]

(c) A myelinated neurone is 740 mm long.
This neurone is able to conduct nerve impulses at 90 m/s.

Calculate the length of time it takes for an impulse to pass along this neurone.
[3 marks]

Give your answer in standard form.
(Show your working.)

_____ s

Blank Page
(Questions continue overleaf)

- 5 (a)** Mistletoe (*Viscum album*) is a parasitic plant which grows on trees. The photograph below shows mistletoe growing on the branches of a tree in winter. The tree shown loses its leaves in winter (deciduous), while mistletoe does not (evergreen).



Mistletoe grows in ball-like clumps, as shown in the photograph above. Each clump represents an individual plant. As a parasite, it gains at the expense of its host. The mistletoe plant produces special structures which can penetrate the outer layers of a branch and absorb nutrients and water from the tree.

(i) Apart from the presence of structures to obtain nutrients and water, and using the information provided, suggest and explain **one** adaptation of mistletoe. [2 marks]

(ii) Parasitism can be described as a +/- interaction. Name **one** other type of +/- interaction. [1 mark]

(b) The photograph below shows ivy (*Hedera helix*) growing on trees.



Like mistletoe, ivy is an evergreen plant that has leaves in winter. However, ivy is not classified as parasitic since it has roots that obtain minerals and water from the ground.

Based on the definition of parasitism as a +/– interaction, some scientists suggest that ivy should be classified as parasitic since it can harm the host tree.

(i) Using the information provided, suggest **two** ways ivy may cause harm to its host tree. [2 marks]

1. _____

2. _____

However, the presence of ivy on trees can benefit animal biodiversity in an area.

(ii) Suggest **one** way in which ivy may help benefit animal biodiversity. [1 mark]

(c) The zone of the Earth just south of the Arctic icecaps is known as tundra. In this zone, conditions are very cold and windy throughout the year and there is little rainfall. Lower layers of soil here are frozen all year and the top layers are frozen for part of the year.

Primary succession in tundra habitats can take over 3000 years to reach climax.

Pioneer species are mainly algae and lichen and these are followed by mosses. The stable end stage is usually low-growing shrubs (often evergreen) with lichens, algae and mosses often present. There are very few large animals in this biome (zone).

Using the information provided, answer the following questions.

(i) Name the type of climax community found in the tundra. [1 mark]

(ii) Suggest **two** reasons why there are usually very few trees in the tundra.
[2 marks]

1. _____

2. _____

(iii) Suggest **one** reason why many of the shrubs are 'evergreen'. [1 mark]

(iv) Succession in the tundra takes much longer than successions in warmer regions, e.g. the British Isles. The main reason for this is the very low temperature in the tundra. Using your understanding of cellular metabolism, suggest an explanation for succession being so slow.
[2 marks]

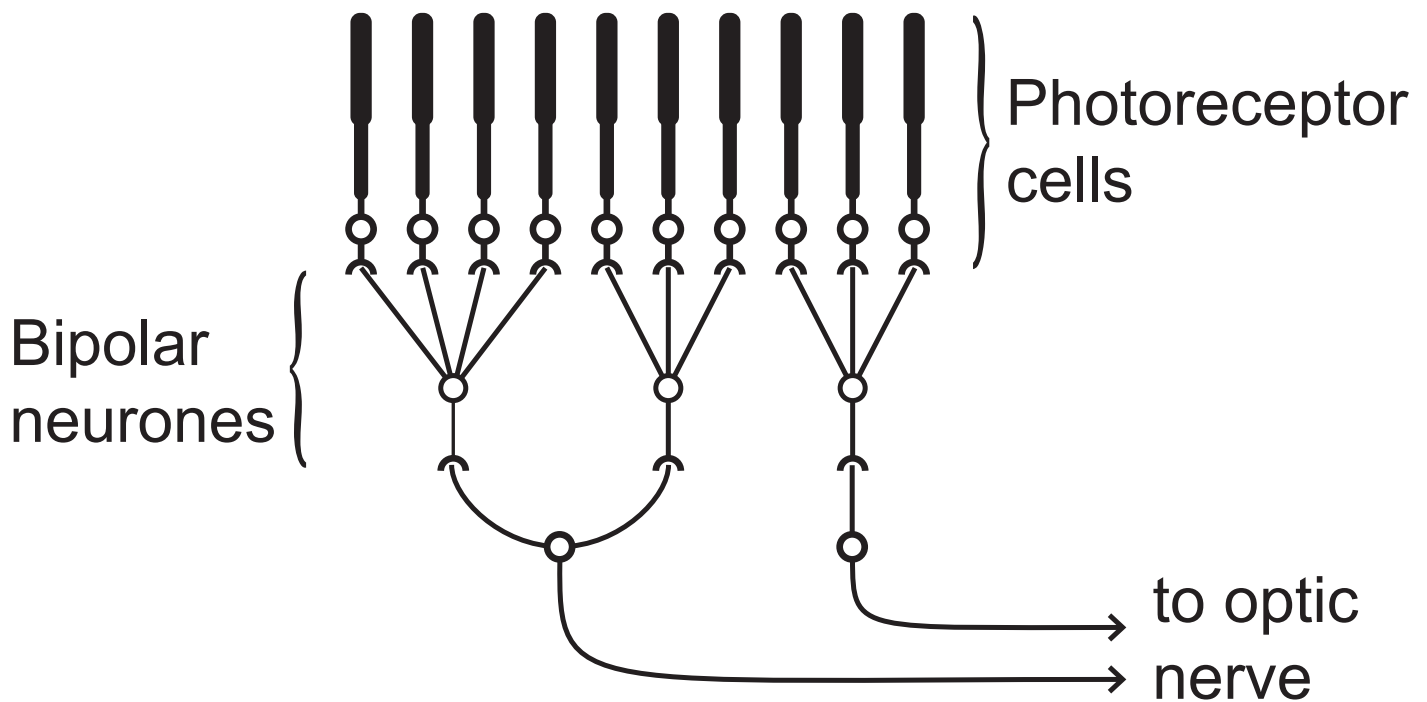
Blank Page
(Questions continue overleaf)

6 (a) The structure and function of the mammalian eye allow light rays to be focused on photoreceptor cells in the retina.

(i) Describe and explain how the eye focuses on a **near** object.

[3 marks]

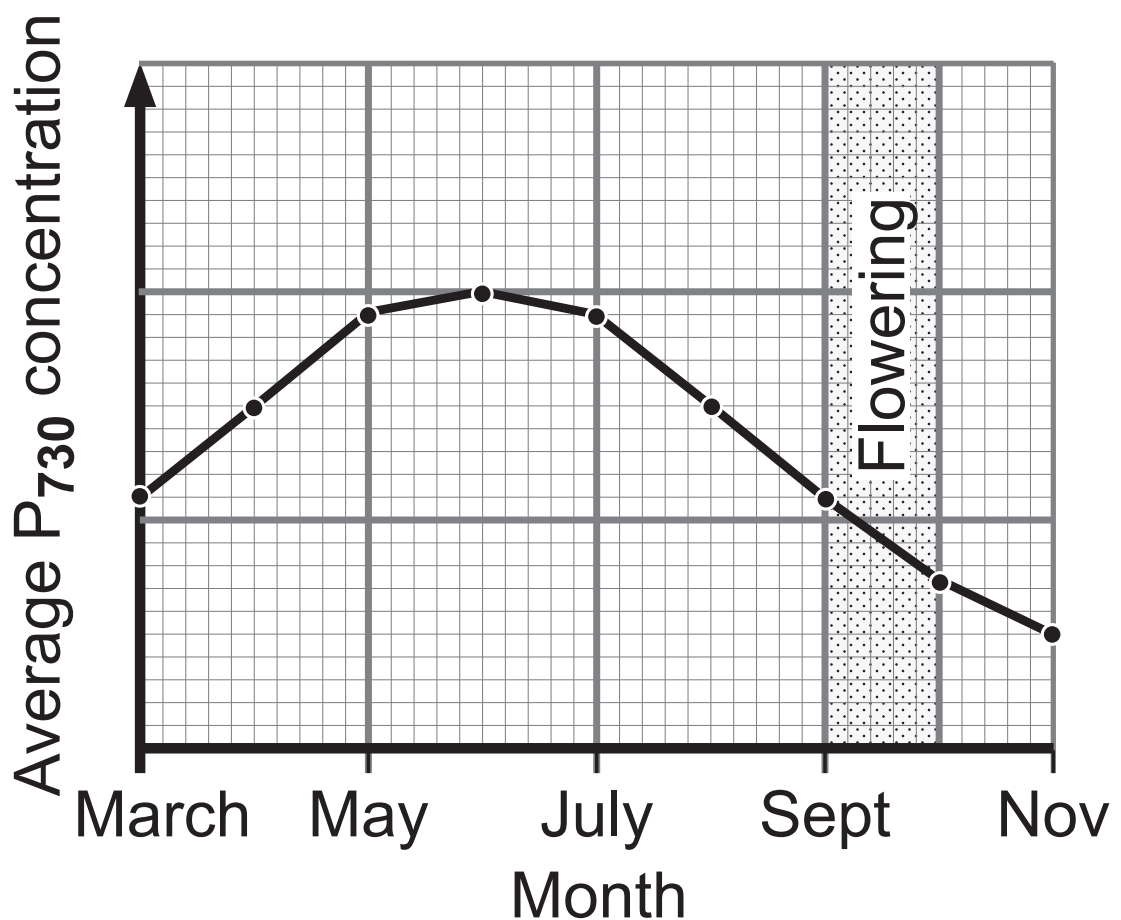
The diagram below represents a small section of the retina. Photoreceptor cells are sensitive to visual stimuli.



(ii) Name the photoreceptor cells shown in the diagram. [1 mark]

Blank Page
(Questions continue overleaf)

(b) Phytochrome is a photoreceptor molecule involved in the flowering process in plants. The graph below shows how the average monthly concentration of the P₇₃₀ form of phytochrome changed between March and November in a particular plant.



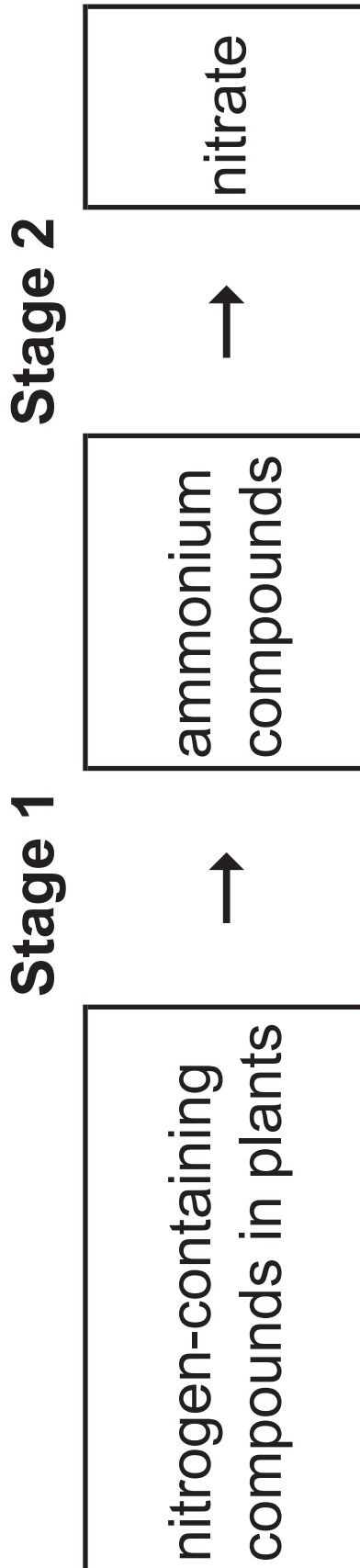
(i) In terms of phytochrome conversions, explain the changes in concentration of P_{730} between March and November. [3 marks]

(ii) Using the graph, describe the evidence which suggests that this plant is a short-day plant. [1 mark]

(iii) The graph shows that flowering in this plant occurs in the autumn. Suggest how the photoperiod could be manipulated to delay flowering until December. Explain your answer. [2 marks]

Blank Page
(Questions continue overleaf)

- 7 (a) The flow diagram below summarises the cycling of nitrogen in nitrogen-containing compounds following the death of plants.



(i) State the general name given to the organisms involved in **Stage 1**.
[1 mark]

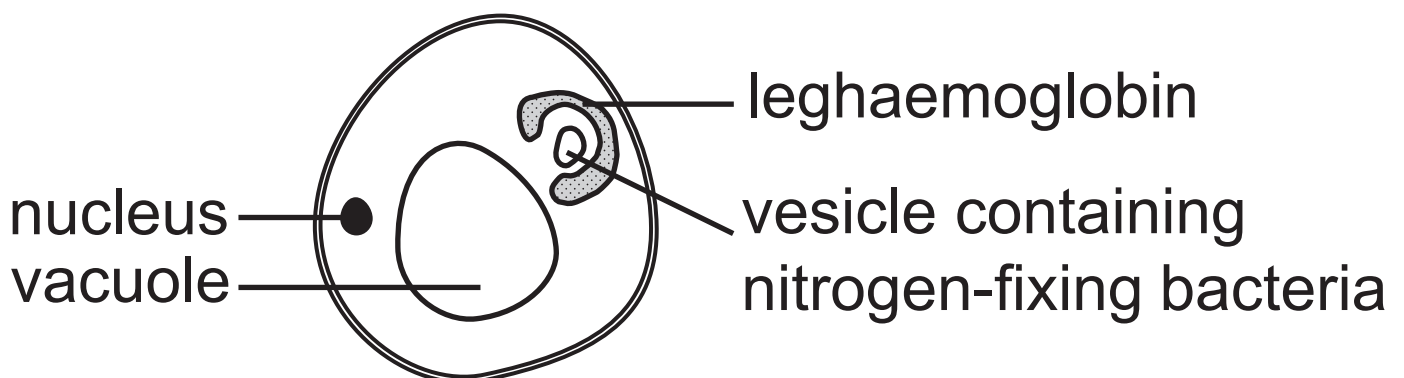
(ii) **Stage 2** takes place faster in non-compacted soil that is well drained. Using your knowledge of nitrification, suggest an explanation for this. [2 marks]

Legumes are plants which are able to fix nitrogen. In these species, nitrogen-fixing bacteria are usually found in cells of the root cortex (between the epidermis and the vascular tissue in the centre of the root).

These bacteria require some oxygen for respiration, but many of the enzymes involved in nitrogen-fixation work best in very low or oxygen-deficient environments.

In some species of legumes, a substance called leghaemoglobin is found in the cytoplasm of the root cortex cells containing the nitrogen-fixing bacteria. This is shown below. Leghaemoglobin is a form of haemoglobin, similar to human haemoglobin. It binds to oxygen if the partial pressure of oxygen reaches a high level.

Root cortex cell



(b) Using the information provided, suggest and explain the role of leghaemoglobin.
[3 marks]

In contrast to nitrogen fixation, denitrification is the process in which nitrate is converted to nitrogen gas. The table below summarises denitrification activity over a range of soil depths in a marsh, an environment in which soil water levels are usually high.

Soil depth/cm	Denitrification activity/ arbitrary units
5	23
10	56
15	84
20	80
25	86

(c) Describe the trend shown and suggest an explanation. [3 marks]

Blank Page

8 The human immunodeficiency virus (HIV) is the virus that can lead to Acquired Immunodeficiency Syndrome (AIDS). AIDS is the term used to describe the characteristic range of ‘opportunistic’ infections and diseases that can develop in people who have been infected by HIV.

HIV is a retrovirus and is very closely related to the simian immunodeficiency virus (SIV), a virus frequently present in chimpanzees, although causing little harm. It is thought that HIV mutated from SIV and that the chimpanzee acted as a ‘reservoir’ for HIV before it passed to humans. Evidence indicates that the transfer of the virus between a chimpanzee and a human occurred in the forests of central Africa in a region where the chimpanzees and humans live in close proximity.

(a) (i) Define the term retrovirus. [1 mark]

(ii) Suggest **one** way in which the HIV virus could have passed from chimpanzees to humans. [1 mark]

(b) The main target cell for HIV in humans is the helper T-cell.

The graph below shows how the number of helper T-cells changed over a ten-year period in an individual infected with HIV.



(i) Using the information provided and your understanding of immunity, suggest why people with AIDS suffer from a range of ‘opportunistic’ infections and diseases that seldom affect people who do not have AIDS.
[3 marks]

Once in the body, HIV attaches to a specific receptor on the surface membrane of helper T-cells, known as the CD4 receptor.

(ii) When scientists were developing drugs to combat AIDS, there was a major focus on the CD4 receptor. Suggest how these drugs could work. [2 marks]

(c) T-cells are also involved in ‘autoimmune’ diseases, where cells of the immune system destroy the body’s own cells. For example, in Type 1 diabetes, killer T-cells destroy the insulin-secreting cells of the pancreas.

Scientists suggest that autoimmune diseases can be a consequence of reduced production of suppressor T-cells.

(i) State the function of suppressor T-cells and explain how reduced production could lead to the development of Type 1 diabetes.
[2 marks]

(ii) Type 1 diabetes often begins in childhood. In many cases, the onset of the condition occurs a few months after a child has suffered from an infectious viral disease such as chickenpox.

Using the information given, suggest an explanation for the link between having an infectious disease and the development of Type 1 diabetes.
[2 marks]

Section B

Quality of written communication will be assessed in this section.

- 9 (a) Phytoplankton are single-celled, photosynthesising protists that live in the surface layers of seas. They are the producers in many food chains. A typical example is shown below.

phytoplankton → herring → puffins → eagles
(fish) (birds) (birds)

Explain why only a very small percentage of the solar energy reaching the sea surface is available for eagle growth in the above food chain. [12 marks]

- (b) Increasing efficiency of energy transfer is an important factor in intensive agriculture.

Explain the role of fertiliser, confinement and high-energy and high-protein foods in increasing efficiency in agriculture. [6 marks]

SOURCES

All images © CCEA unless otherwise stated

For Examiner's use only	
Question Number	Marks
1	
2	
3	
4	
5	
6	
7	
8	
9	
Total Marks	

Examiner Number

Permission to reproduce all copyright material has been applied for.
In some cases, efforts to contact copyright holders may have been unsuccessful and CCEA will be happy to rectify any omissions of acknowledgement in future if notified.